



## I Can Group With Remainders



How many sweets are there?

Group the sweets into groups of 2.


I made \_\_\_\_\_ groups with \_\_\_\_\_ left over.



How many apples are there?

Group the apples into groups of 2.

I made \_\_\_\_\_ groups with \_\_\_\_\_ left over.



How many bananas are there?

Group the bananas into groups of 3.

I made \_\_\_\_\_ groups with \_\_\_\_\_ left over.



How many lollipops are there?

Group the lollipops into groups of 3.


I made \_\_\_\_\_ groups with \_\_\_\_\_ left over.



How many muffins are there?

Group the muffins into groups of 5.


I made \_\_\_\_\_ groups with \_\_\_\_\_ left over.



How many carrots are there?

Group the carrots into groups of 5.


I made \_\_\_\_\_ groups with \_\_\_\_\_ left over.



How many pears are there?

Group the pears into groups of 4.


I made \_\_\_\_\_ groups with \_\_\_\_\_ left over.



How many strawberries are there?

Group the strawberries into groups of 4.

I made \_\_\_\_\_ groups with \_\_\_\_\_ left over.



How many biscuits are there?

Group the biscuits into groups of 6.

I made \_\_\_\_\_ groups with \_\_\_\_\_ left over.